


Name: _____

Class: _____


Date: _____


Moon Phases

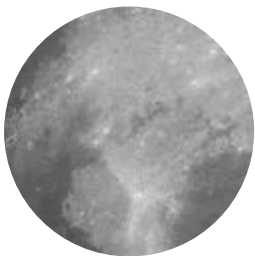
Using what you just learned, fill out the eight different types below. Please note that the dark area represents shadow and the gray area represents the visible moon, just as would be seen in the night sky.



















Dark Room Calendar

<u>Day 1:</u>	<u>Day 2:</u>	<u>Day 3:</u>	<u>Day 4:</u>	<u>Day 5:</u>	<u>Day 6:</u>	<u>Day 7:</u>
<u>Day 8:</u>	<u>Day 9:</u>	<u>Day 10:</u>	<u>Day 11:</u>	<u>Day 12:</u>	<u>Day 13:</u>	<u>Day 14:</u>
<u>Day 15:</u>	<u>Day 16:</u>	<u>Day 17:</u>	<u>Day 18:</u>	<u>Day 19:</u>	<u>Day 20:</u>	<u>Day 21:</u>
<u>Day 22:</u>	<u>Day 23:</u>	<u>Day 24:</u>	<u>Day 25:</u>	<u>Day 26:</u>	<u>Day 27:</u>	<u>Day 28:</u>